



Hawaiian Geography


Hawaiian islands

How many Hawaiian islands are there? How many can you name?



There are 132 Hawaiian islands. The eight largest ones are shown above. Which one do we live on?

Island chains

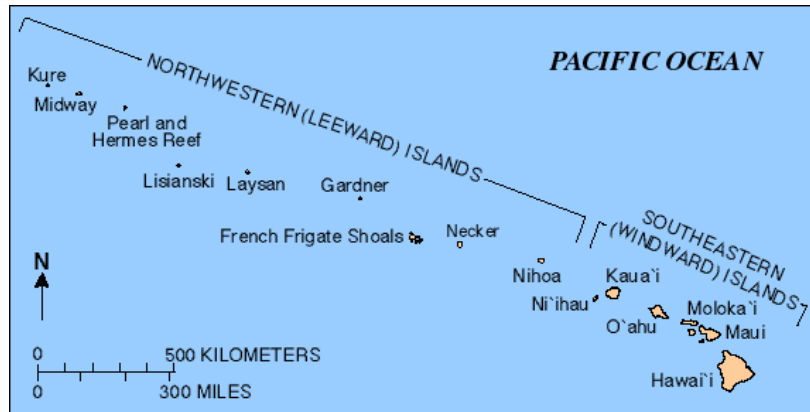


← This is a **chain**.

Hawaii is an **island chain**. →

In fact, Hawaii is the world's longest island chain.

What are some other island chains?
Does Korea have any island chains?



Volcanoes

Active volcano ↓



Inactive volcano ↓



Volcanoes made the Hawaiian islands. Some of these volcanoes are still active.

Which ones? Which islands are they on?

Are there volcanoes in Korea? Where?
Are they active or inactive?

Island facts

A family owns one of the islands. Which island? →



The highest mountain of Hawaii is Mauna Kea. Which island is it on?

←

One of the islands is owned by Dole. Which one? What does Dole grow there?

→




Which island has the largest population?

←

Mount Waialeale is the rainiest place on earth. Which island is it on?

→





No people live on one of the islands. Which one?

←

Discuss

Which islands have you been to? Did you like them? Why?

Which islands do you want to go to? Why?

Which islands do you not want to go to? Why?

Do you like living on an island? Why or why not?

Hawaii has active volcanoes. Do you think they are dangerous? Why or why not?